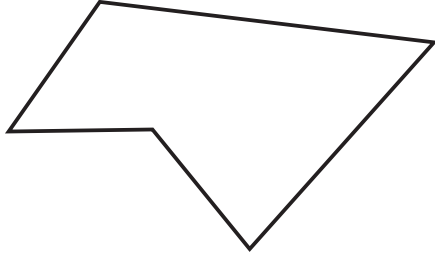


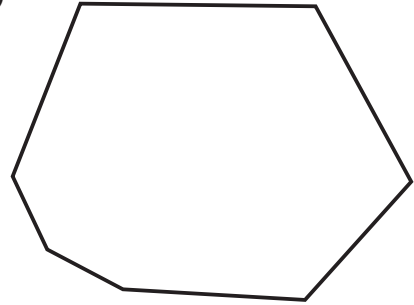
# Polygons

1) Next to each of the shapes, write down its name.

a)



b)



2) a) What is the name given to a 10-sided shape?

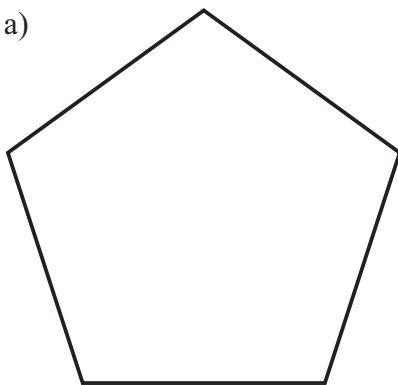
b) What is the name given to an 8-sided shape?

3) To be a regular polygon the shape must have equal \_\_\_\_\_ and equal \_\_\_\_\_.

Fill in the blanks.

4) What are the names of these regular polygons?

a)



b)

