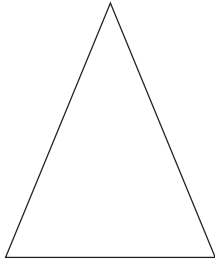
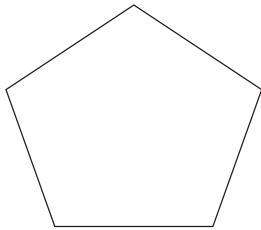


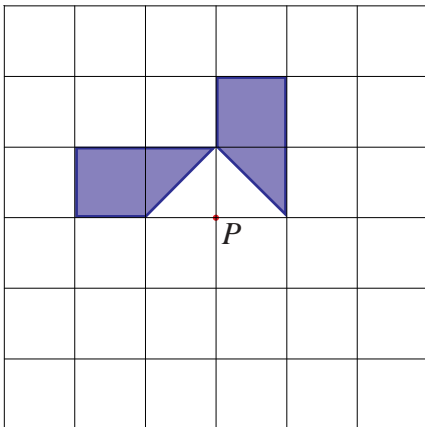
- 1) Draw all the lines of symmetry on the triangle and the rectangle.



- 2) What is the order of rotational symmetry of the two shapes below?



- 3) The diagram below, shows part of a shape.



The shape has rotational symmetry of order 4 about point  $P$ .

Complete the shape.

- 4) On each of the shapes below, draw one plane of symmetry.

