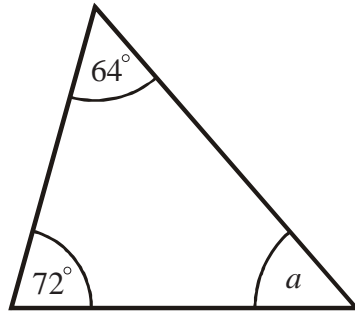
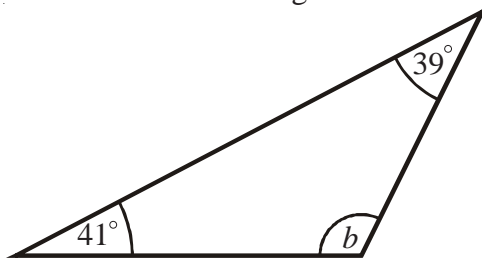


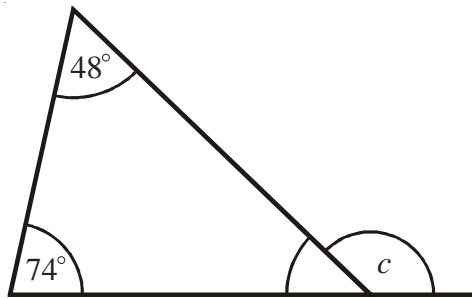
- 1) Work out the size of angle a .



- 2) Work out the size of angle b .



- 3) Work out the size of angle c .



- 4) Work out the size of angle d .

