
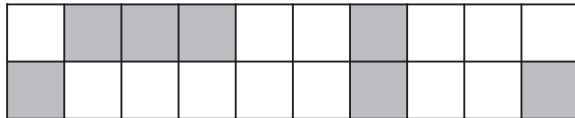



1) What percentage of this grid is shaded?



2) What percentage of this grid is shaded?



3) a) What percentage of this grid is shaded?



b) How many more squares should be shaded to make 80% of the grid shaded?

4) What percentage of this grid is shaded?

