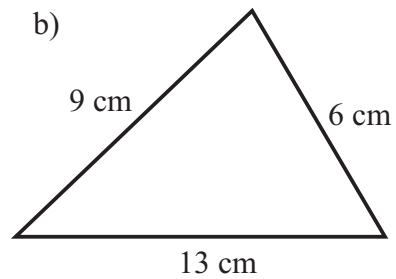
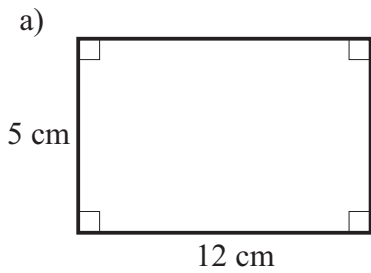


# Perimeters

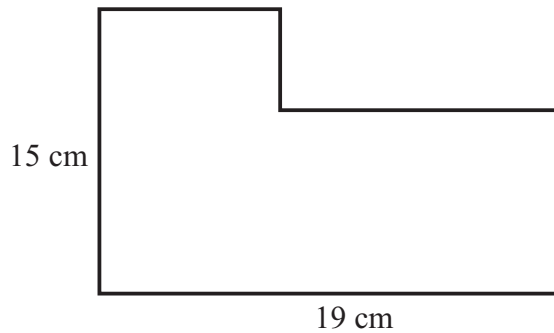
1) Find the perimeters of the following two shapes.



2) The length of a rectangle is 9 cm.  
The total perimeter is 30 cm.

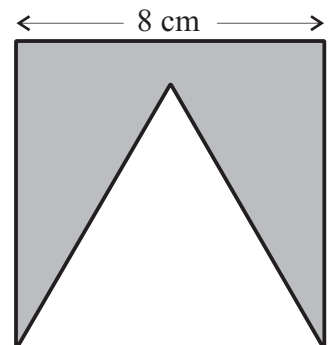
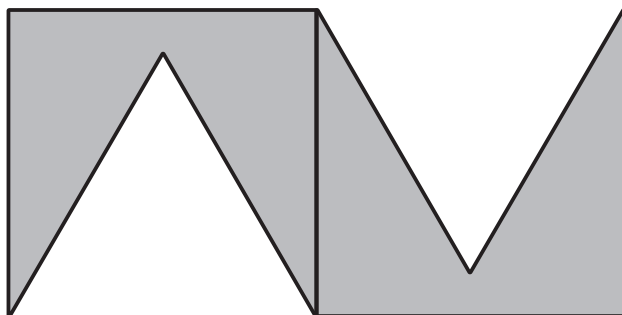
Calculate the length of the width of the rectangle.

3) Work out the perimeter of this L shape.



4) This shape is made by cutting out an equilateral triangle from a square.

Two of these shapes are then put together to make this shape.



Work out the perimeter of this new shape.